
















6th Month, 2nd Week, 5th Day Syllabus: Unit 6: Exercise-6 Q No. 2

Q.No.1. Mark the figure which has the given properties: (10)















سوال نمبر 1: اس شکل پر نشان لگائیں جس میں دی گئی خصوصیات موجود ہیں:

	Properties	3-D shapes		
(a)	<ul style="list-style-type: none"> • 0 vertices • 3 surfaces • 2 edges 	<input type="checkbox"/> 	<input type="checkbox"/> 	<input type="checkbox"/> 
(b)	<ul style="list-style-type: none"> • 8 vertices • 6 flat surfaces • 12 edges 	<input type="checkbox"/> 	<input type="checkbox"/> 	<input type="checkbox"/> 
(c)	<ul style="list-style-type: none"> • 0 vertices • 1 surface • 0 edges 	<input type="checkbox"/> 	<input type="checkbox"/> 	<input type="checkbox"/> 
(d)	<ul style="list-style-type: none"> • 5 vertices • 5 surface • 8 edges 	<input type="checkbox"/> 	<input type="checkbox"/> 	<input type="checkbox"/> 
(e)	<ul style="list-style-type: none"> • 1 vertex • 2 surfaces • 1 edge 	<input type="checkbox"/> 	<input type="checkbox"/> 	<input type="checkbox"/> 

6th Month, 2nd Week, 5th Day Syllabus: Unit 6: Exercise-6 Q No. 2

Q.No.1. Mark the figure which has the given properties: (10)

سوال نمبر 1: اس شکل پر نشان لگائیں جس میں دی گئی خصوصیات موجود ہیں:

	Properties	3-D shapes		
(a)	<ul style="list-style-type: none"> • 0 vertices • 3 surfaces • 2 edges 	<input type="checkbox"/> 	<input type="checkbox"/> 	<input type="checkbox"/> 
(b)	<ul style="list-style-type: none"> • 8 vertices • 6 flat surfaces • 12 edges 	<input type="checkbox"/> 	<input type="checkbox"/> 	<input type="checkbox"/> 
(c)	<ul style="list-style-type: none"> • 0 vertices • 1 surface • 0 edges 	<input type="checkbox"/> 	<input type="checkbox"/> 	<input type="checkbox"/> 
(d)	<ul style="list-style-type: none"> • 5 vertices • 5 surface • 8 edges 	<input type="checkbox"/> 	<input type="checkbox"/> 	<input type="checkbox"/> 
(e)	<ul style="list-style-type: none"> • 1 vertex • 2 surfaces • 1 edge 	<input type="checkbox"/> 	<input type="checkbox"/> 	<input type="checkbox"/> 